

6. The United States produces **seventeen billion**, **four hundred ninety-one million**, **thirty-three thousand** cubic feet of timber a year. What is the **value** of the **written numeral**?

Bill	Mill	Thous	Unit
17	491	033	000

7. The Dallas-Fort Worth area has five million, seven hundred twenty-one thousand, eight hundred one residents. What is the value of the digit **7** in the number of residents?

8. Fill in the Blank.

Greater

929,934,867 > 929,834,867
 929,834,867

9. Write this number in standard form.

800,000,000,000 +
 8,000,000,000 + 7,000,000 +
 600,000 + 50,000 + 4,000 +
 30 + 2

Add

10. What is the **largest** number that is **smaller** than **one billion**?

Bill	Mill	Thousand	Unit
1	999	999	999

999,999,999

B M TH U

1. A telecommunications company earned **6,596,050,001** dollars in one year. How is this number written in **word form**?

6 billion, five hundred ninety six million, fifty thousand, one

2. What are the **values** of the **5's** in the number above?

500,000,000
50,000

3. The table below shows some countries and the number of pounds of hot dogs eaten per year.

Country	Area
United States	3,817,792
Brazil	3,286,470
Canada	3,751,788
China	3,705,386
Mexico	3,715,800
Japan	3,089,454

List the **top four** countries in order from **Least to Greatest**.

Top 4
 5 → B
 L → G

US
 Canada
 China
 Mexico

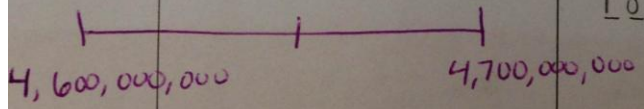
1. China
 2. Mexico
 3. Canada
 4. U.S

L → G
 China, Mexico, Canada,
 US

4. Last year Disney sold between **4,600,000,000** to **4,700,000,000** movies. Which could be the number of movies Disney sold last year?

- ~~a. 4,694,046 movies~~
- ~~b. 4,697,043 movies~~
- c. 4,719,042,046 movies
- d. 4,629,000,123 movies

4,650,000,000



5. McDonalds has already sold **one hundred five million, five** French fries this year. What is this number in **standard form**?

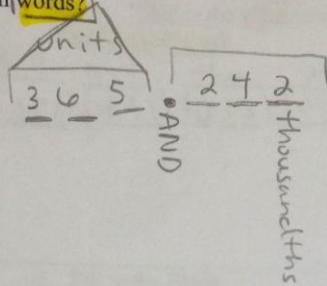
Number form

Mill thou units

105,000,005.


Build your house before you move!!

1. The Earth's entire journey around the sun takes exactly **365.242** days. What is the number **365.242** written in words?

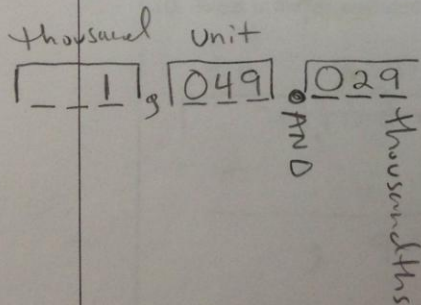


Three hundred sixty-five AND two hundred forty two thousandths

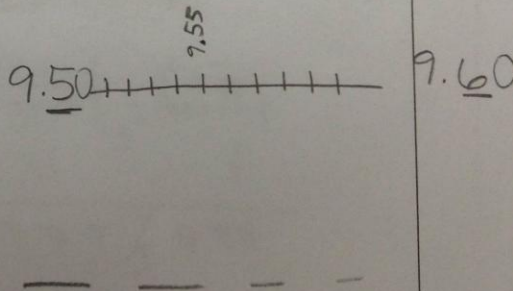
2. Mr. Marcos wanted to know if his fifth graders had learned place value. He asked them to place a line under the digit that has a value of **nine hundredths** in the number below. Where should his student place the line?



3. The newspaper reported that the average house size was **one thousand forty-nine and twenty nine thousandths** square feet. What is the number in **standard form**?



4. A desert is defined as an area of the world that has less than 10 inches of rainfall per year. Paul read that a certain desert area received between **9.5** and **9.6** inches of rainfall one year. Write **3 different decimal numbers between 9.5 and 9.6**.



5. Use these digits when answering

6. Gabby made a seven-digit number